




Year 6 weekly work 18th May 2020. Hi everyone, hope you are well and keeping safe. Parents there will be lots of online research coming, please keep up-to-date with e-safety & monitor what your child is doing. <https://www.alarms.org/kidrex/> is a safe search engine.

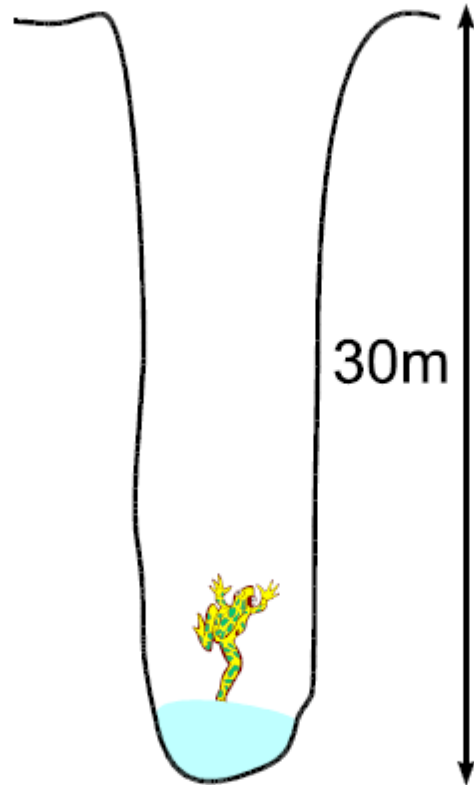
<p><u>Every day</u> Reading- out loud to an adult or a sibling. OR Read Theory online (log ins in your home learning pack) 20 minutes</p>	<p><u>Every day</u> PE with Joe Wicks Find his videos online.</p>	<p><u>Every day</u> Times Table Rock Stars All tables (Log ins in your home learning pack)</p>	<p><u>Every day</u> Handwriting You can use your 5 minute write for this.</p>	<p><u>Every day</u> Time for a clear out! Have a look through your old belongings, can you donate them to charity or put them to one side for our school fayre?</p>
<p><u>History</u> It's Florence Nightingale's Birthday on 12th May. Who was Florence Nightingale?</p>  <p>Present this however you like.</p>	<p><u>Science</u> Watch: https://www.bbc.co.uk/bitesize/topics/zwdr6yc/articles/zqv4cwx</p> <p>Create characters for each element that is in your blood.</p> 	<p><u>Writing</u> Film review! Watch a new film or an old favourite and write a film review.</p> <p>5 minute write:</p> <ul style="list-style-type: none"> • Farmers • NHS • Carers • Supermarkets 	<p><u>Spellings</u> Programme Telegram Hologram Diagram Grammar Grammatical Parallelogram Monogram Programmer Program</p>	
<p>Quick Maths- Monday</p> <ol style="list-style-type: none"> 1. $334-133=$ 2. $4/9+7/9=$ 3. $4 \times (24 \div 6)=$ 4. $7/8 \times 1/2=$ 5. $3735+100=$ 	<p>Quick Maths- Tuesday</p> <ol style="list-style-type: none"> 1. $6-2.54=$ 2. $742-8=$ 3. $___ = 56 \div 7$ 4. $263 \div 100=$ 5. $1 \frac{4}{9} \times 3=$ 	<p>Quick Maths- Wednesday</p> <ol style="list-style-type: none"> 1. $6 \times 77=$ 2. $64 \div 8=$ 3. $1/6 + ___ = 5/12$ 4. $7700 \div 11=$ 5. $24.325-9.63$ 	<p>Quick Maths- Thursday</p> <ol style="list-style-type: none"> 1. $2.56 \times 7=$ 2. $456 \div 19=$ 3. 30% of 3200= 4. $46 \times 23=$ 5. $3/4 \div 3=$ 	<p>Quick Maths- Friday</p> <ol style="list-style-type: none"> 1. $7+3 \times 5=$ 2. $1431 \div 27=$ 3. $4/7 \times 5/8=$ 4. $726 \div 6=$ 5. $3-12=$

Please see the Maths problem solving questions on page 2!

The Jumping Frog

☆ 6

A frog has fallen into a pit that is 30m deep.



Each day the frog climbs 3m, but falls back 2m at night. How many days does it take for him to escape?

Number Lines 1

☆☆ 13

Can you put the numbers 1 to 7 in each circle so that the total of every line is 12?

